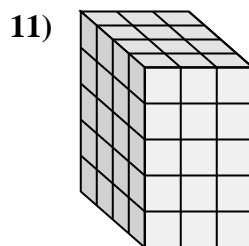
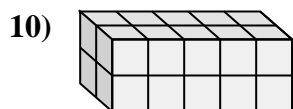
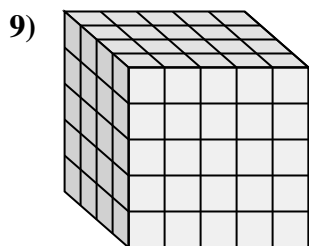
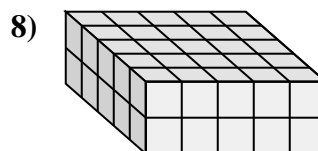
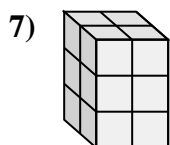
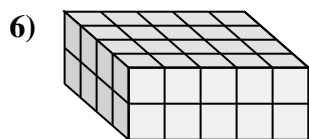
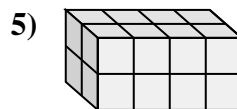
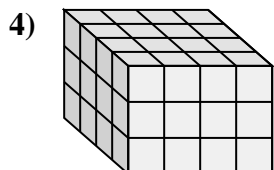
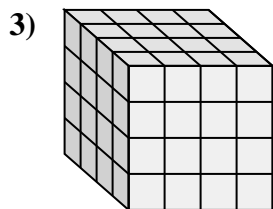
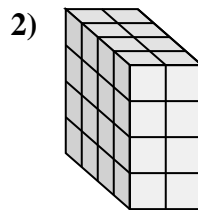
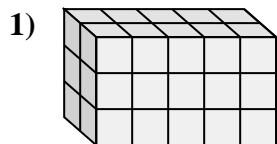
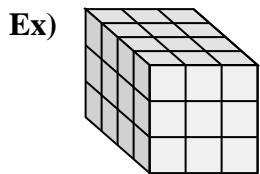




Match each problem with the equation that could represent it. Answer with the missing term and letter.



Answers

Ex. H, 3

1. K, 30

2. B, 32

3. L, 4

4. G, 4

5. J, 2

6. C, 5

7. D, 12

8. A, 5

9. E, 4

10. I, 20

11. F, 3

A. $__ \times 5 \times 2 = 50$

B. $4 \times 2 \times 4 = __$

C. $4 \times __ \times 2 = 40$

D. $2 \times 2 \times 3 = __$

E. $__ \times 5 \times 5 = 100$

F. $4 \times __ \times 5 = 60$

G. $4 \times __ \times 3 = 48$

H. $4 \times __ \times 3 = 36$

I. $2 \times 5 \times 2 = __$

J. $__ \times 4 \times 2 = 16$

K. $2 \times 5 \times 3 = __$

L. $4 \times __ \times 4 = 64$